

Question Booklet No.

001768

Skill Development and Entrepreneurship Department

Directorate of Vocational Education and Training

Directorate of Skill Development, Employment and Entrepreneurship

Question Paper Group Name: Apparel

Question Paper Post Names: Craft Instructor-Fashion Technology, Craft Instructor-Cutting & Sewing, Craft Instructor-Dress Making

Duration: 60 Minutes

Total Questions: 40

INSTRUCTIONS

1. This Question Paper Booklet contents 40 mandatory questions. Candidate should check the Question Paper Booklet and ensure that it contents all pages and questions before starting to answer. If candidate finds any problem pertaining to printing/ binding/ incomplete pages etc, candidate should immediately get the Question Paper replaced from the Invigilator.
2. Candidate has to write his/ her seat number in this block.

--	--	--	--	--	--	--	--	--	--
3. The Question Booklet Number as printed above should be mentioned at the appropriate place on the OMR Answer Sheet.
4. All the Questions are provided with 4 options as 1, 2, 3 and 4. Candidate should select the most correct Option and mention the Option Number on the OMR Answer Sheet in front of the respective Question Number by fully shading the Option Number with **BLACK INK BALL POINT PEN Only**.
5. All Questions carry equal marks i.e. 1 Question has a weightage of 1 marks. Candidate should mind the available time for the examination and solve the questions accordingly.
6. The option shaded once on the OMR Answer Sheet should not be roughed or in any other way changed. Thus candidate should take utmost care while marking their options on OMR Answer Sheet. Such changes if any or any attempt to rough/ change options shall not be checked by the authorities.
7. Marks shall be awarded to the correct answers only during the evaluation of the OMR Answer Sheet. No marks shall be deducted for registering wrong answers (shading wrong option) or not attempting questions. Thus there is **NO NEGATIVE MARKING SYSTEM**.
8. All the rough work has to be done on the sheet provided for Rough Work in the Question Booklet only. Writing anything on the Question Paper Booklet, OMR Answer Sheet or any other Paper Sheet shall be treated as an unfair means and entitle for action under "Prohibition of Unfair Practices during examination Ordinance – 1982".
9. Method of Shading the Correct Option on the OMR Answer Sheet:

Q.No. 25. How many Centimeters make 1 Meter?

- | | | | |
|-----|------|-----|-------|
| (1) | 10 | (2) | 100 |
| (3) | 1000 | (4) | 10000 |

The Correct Option for this Question is (1) and hence the (2) option on the OMR Answer Sheet in front of Question Number 25 has to be shaded as following




Correct Method of Shading Wrong Method of Shading

USE ONLY BLACK INK BALL POINT PEN FOR SHADING**IMPORTANT**

This Question Paper Booklet and OMR Answer Sheet is the property of the Department and is being handed over to the candidate for examination purpose only in the examination hall.

Any means of copying this Question Paper Booklet or any matter within in part or full, and/or transferring/ circulating during the examination period is prohibited and shall be treated as a means of criminal offence and the respective person shall be booked under "Prohibition of Unfair Practices during examination Ordinance – 1982" and shall be entitled for imprisonment for 1 year and / or penalty of Rs. 1000.

Further unauthorized handling, transfer or copying of this Question Paper Booklet and OMR Answer Sheet during examination period by the staff including Departmental Staff and Staff appointed for Examination purpose is also prohibited and entitled for action as per above ordinance.

THIS QUESTION PAPER BOOKLET AND PART – 1 OF OMR ANSWER SHEET HAVE TO BE SUBMITTED TO THE INVIGILATOR AFTER THE EXAMINATION.

1. Embroidery Needle size range from _____ to _____

1. 10 – 16

2. 14 – 24

3. 20 – 26

4. 1 – 10

2. Fabric is interlacing of _____ & _____ yarn.

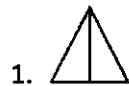
1. Warp & Weft

2. Right & Left

3. Up & Above

4. Up & Down

3. Following sketch is known as double pointed dart as Fish dart



4. _____ tucks are not type of tucks.

1. Plain

2. Cross

3. Dart

3. Fish

5. What is lightness & darkness of the color?

1. Value

2. Hue

3. Intensity

4. Gray – Scale

6. What is technique used in Tie & dye?

1. Direct Printing

2. Transfer printing

3. Block printing

4. Resist printing

7. Which texture gives heavy look to a figure?

1. Rough & thick

2. Smooth

3. Sheer

4. Transparent

8. Nap fabric should be cut in _____

- | | |
|------------------|--------------------|
| 1. Two direction | 2. One direction |
| 3. All direction | 4. Cross direction |

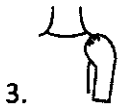
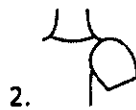
9. _____ & _____ are parts of shift collar.

- | | |
|-----------------|---------------------|
| 1. Zip & fly | 2. Cuffs & plackets |
| 3. Stand & Fall | 4. Button's & yoke |

10. _____ is a composition of pattern pieces on fabric.

- | | |
|--------------|------------|
| 1. Drafting | 2. Cutting |
| 3. Stitching | 4. Lay-out |

11. Which is leg of mutton sleeves?



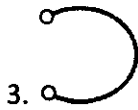
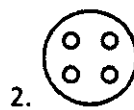
12. If upper thread form a loops while stitching problem is in

- | | |
|-------------------|-------------|
| 1. Bobbin & case | 2. Spool |
| 3. Tension spring | 4. Feed dog |

13. Sewing machine leaves stains on fabric because of _____

- | | |
|------------------|------------------|
| 1. Tight tension | 2. Over oiling |
| 3. Feed dog | 4. Spool spindle |

14. Following is a type of shank button.



15. Which process makes fabric shrink – free?

1. Rolling

2. Twisting

3. Sanforizing

4. De- Sizing

16. How to remove tea & coffee stains from fabric?

1. Use soapy water

2. Use salt & lime

3. Use petrol

4. Use methyl

17. _____ Fabrics are grain less / grain free materials.

1. Satin

2. Twill

3. Non- Woven

4. Cotton

18. Shrink & melt is the burning test of following fibre.

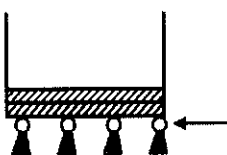
1. Cotton

2. Wool

3. Nylon

4. Silk

19. Following figure showing



1. Tassles

2. Ribbon

3. Bias Trimming

4. Cord

20. To add fullness in garment which method is used?

- | | |
|----------------------|---------------|
| 1. Draping | 2. Drafting |
| 3. Dart-Manipulation | 4. Alteration |

21. What is role of quality controller?

- | | |
|--------------|---------------|
| 1. Designing | 2. Marketing |
| 3. Financing | 4. Inspection |

22. To join two pieces together _____ is used.

- | | |
|----------|-----------|
| 1. Seam | 2. Pleats |
| 3. Tucks | 4. Tapes |

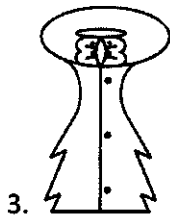
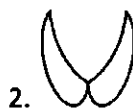
23. In shirt far sleeves _____ opening is used.

- | | |
|----------------------|----------------------|
| 1. Two piece placket | 2. Faced plackets |
| 3. Continuous | 4. One-piece placket |

24. _____ is a layer of material between alter fabric & lining

- | | |
|----------------|-------------|
| 1. Interlining | 2. Casing |
| 3. Interfacing | 4. Shirring |

25. Is a peter pan collar



26. What is trimming?

- | | |
|--------------------------------------|------------------------------|
| 1. Remove creases of fabric | 2. Remove stains from fabric |
| 3. Remove extra threads from garment | 4. Remove colors of garment |

27. Which stitch is used to finish edges as corner of an article?

- | | |
|-------------------|-------------------|
| 1. Blanket stitch | 2. Stem stitch |
| 3. Chain stitch | 4. Feather stitch |

28. Is an example of complementary colors?

- | | |
|-------------------|------------------|
| 1. Black & white | 2. Red & yellow |
| 3. Green & violet | 4. None of these |

29. What is opacity of a fabric?

- | | |
|-----------|---------------|
| 1. Weight | 2. Width |
| 3. Fall | 4. Brightness |

30. Corded seam is a type of

- | | |
|--------------------|--------------------|
| 1. Temporary seam | 2. Permanent seam |
| 3. Top stitch seam | 4. Decorative seam |

31. Full length of measuring tape is _____ cm

- | | |
|-----------------|-----------------|
| 1. 100 – 151 cm | 2. 200 – 250 cm |
| 3. 50 – 100 cm | 4. 155 – 175 cm |

32. Pipping is _____ finishing & made up of _____ strip.

- | | |
|----------------------|----------------------|
| 1. Simple & straight | 2. Temporary & Bias |
| 3. Decorative & Bias | 4. Permanent & Curve |

33. In button hole machine following part cut button holes.

- | | |
|---------------------|-----------------|
| 1. Stitch regulator | 2. Cutter Blade |
| 3. Blade Bar | 4. Face plate |

34. _____ is a type of fastener used in kids wear.

- 1. Zip
- 2. Elastic
- 3. Velcro
- 4. Laces

35. What are key features of good fit?

- 1. Comfort & ease
- 2. Cost & price
- 3. Look & texture
- 4. Cheap & trendy

36. What is silhouette?

- 1. Structural line
- 2. Curve lines
- 3. Vertical lines
- 4. Out – side lines

37. _____ tool is used to cut specific part in a picture.

- 1. Bezier
- 2. Crop
- 3. Paint Bucket
- 4. Pen tool

38. Following is the part of principles of design.

- 1. Emphasis
- 2. Hanger
- 3. Scissors
- 4.3 Chalk

39. Which type of zippers plackets are used for gents trousers?

- 1. Fly front
- 2. Open end
- 3. Invisible
- 4. Visible

40. Which symbol represents "Can be bleached with chlorine"



SPACE FOR ROUGH WORK

SE

SE